

Name: _____

Date: _____

Worksheet 9-2 Digestive System (Nelson p.94-99)

1. Label the diagram below using the key terms provided.

anus

large intestine

small intestine

appendix

liver

rectum

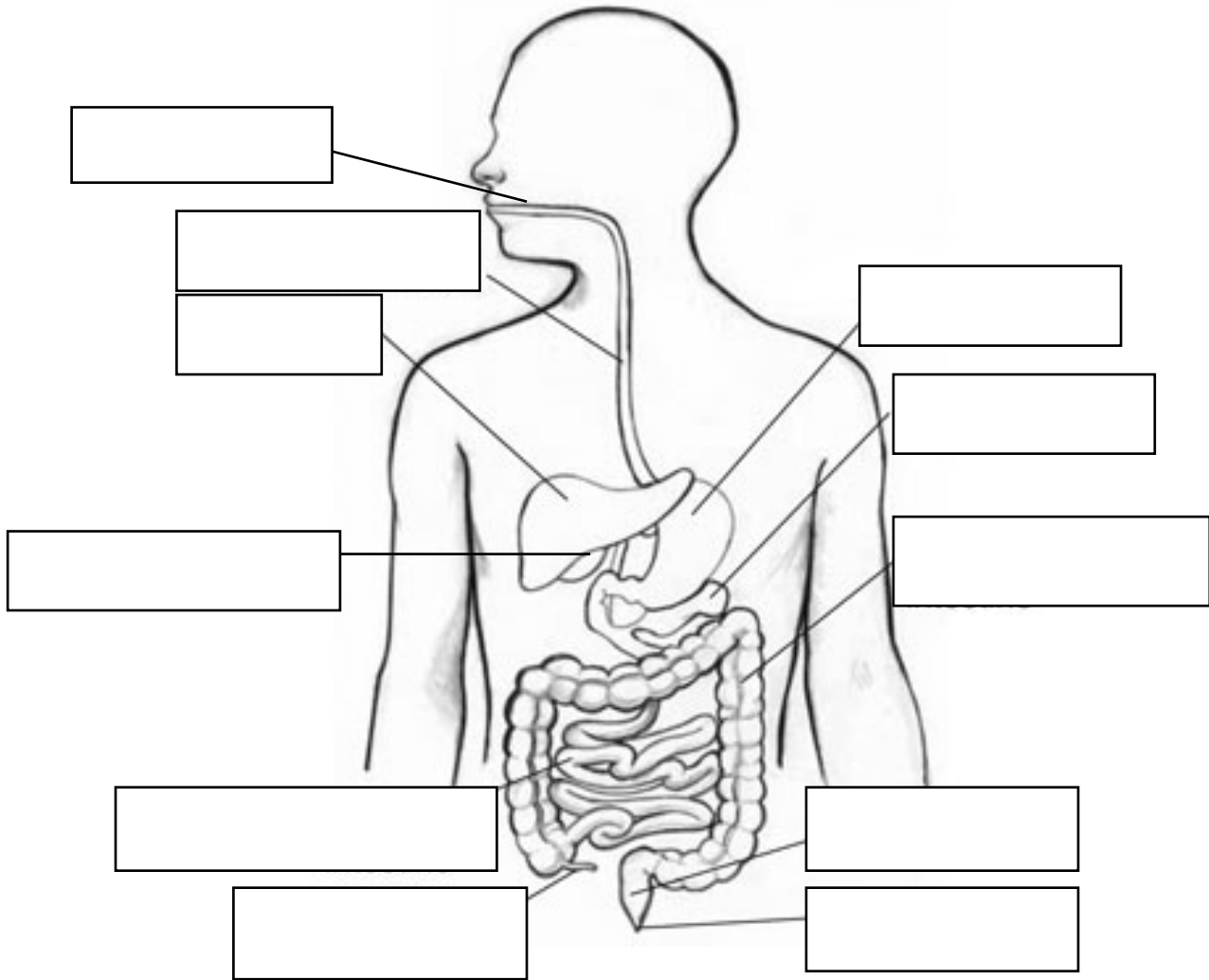
esophagus

mouth

stomach

gallbladder

pancreas



2. Label the diagram below using the key terms provided.

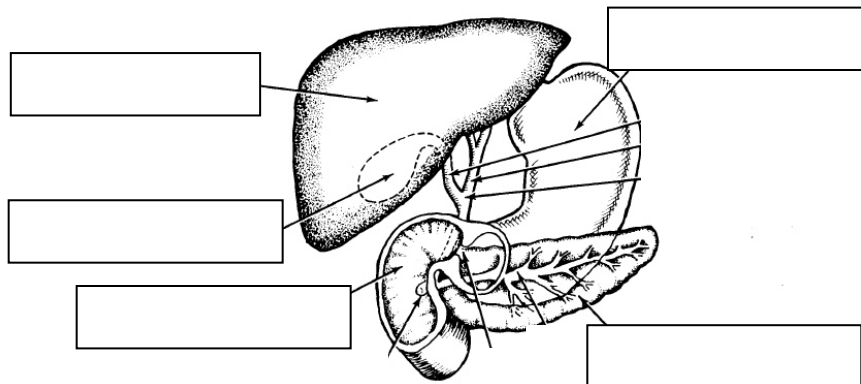
duodenum

gall bladder

liver

pancreas

stomach

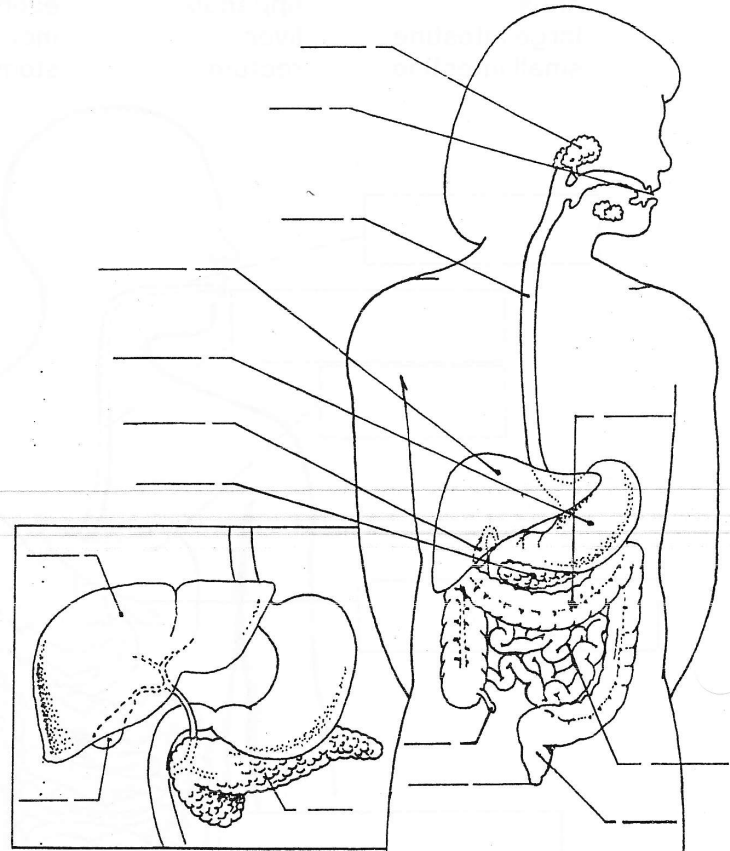


THE HUMAN DIGESTIVE SYSTEM

Name _____

Label the following parts of the human digestive system on the diagram below.

- a. mouth
- b. salivary glands
- c. esophagus
- d. stomach
- e. liver
- f. pancreas
- g. small intestine
- h. large intestine
- i. rectum
- j. anus
- k. appendix
- l. gall bladder



Accessory Organs

Food does not pass through three organs in the digestive system. Label the three accessory organs in the diagram to the right.

- m. liver
- n. gall bladder
- o. pancreas

Fill in the blanks below with the correct answers.

Food passes from the _____ to the _____ to the _____ and then to the _____, where gastric juices break up proteins and other molecules. From the stomach, food passes to the _____, where nutrients are absorbed into the body's bloodstream. Undigested material moves into the _____ or colon, where water is resorbed and the residual materials is compacted. This material, now known as feces, moves into the _____ where it is stored temporarily until it passes out of the _____. Above the stomach is the _____, which plays many important roles in digestion, and nested below the stomach is the _____, which secretes many of the digestive enzymes.

anus
pancreas

esophagus
pharynx (throat)

large intestine
small intestine

liver
rectum

mouth
stomach